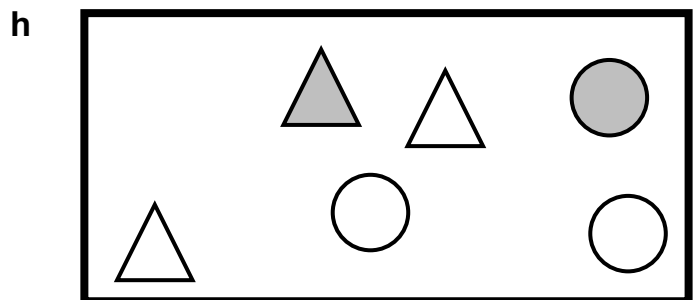
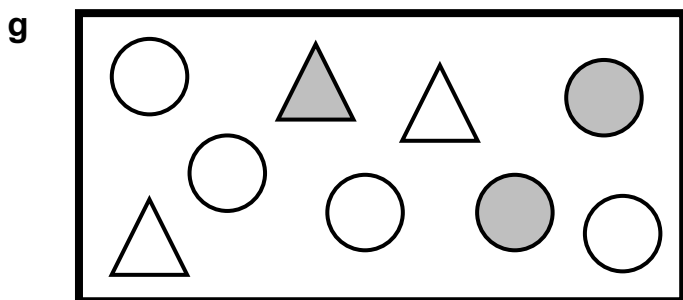
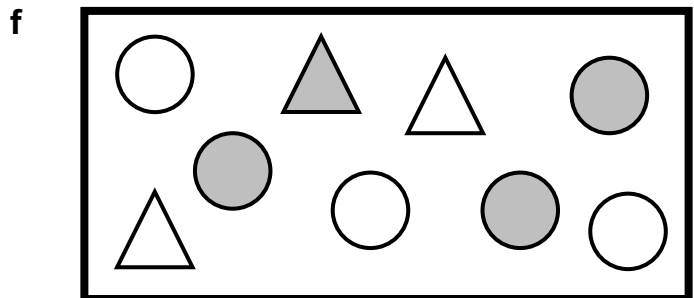
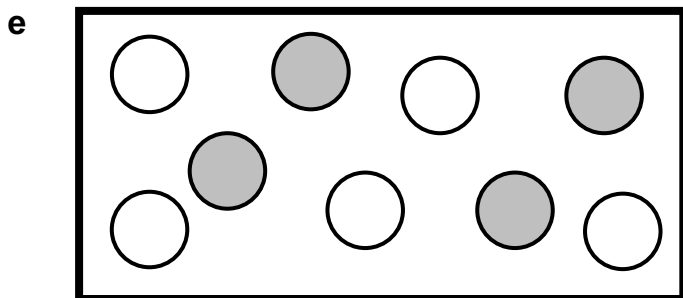
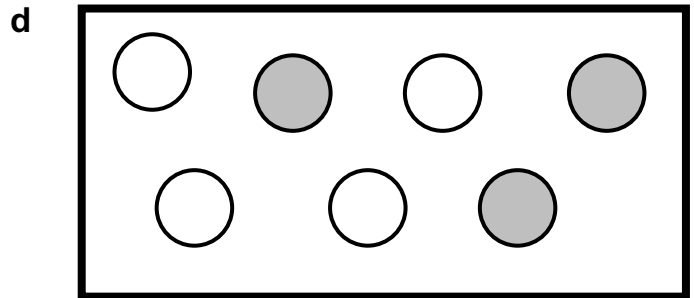
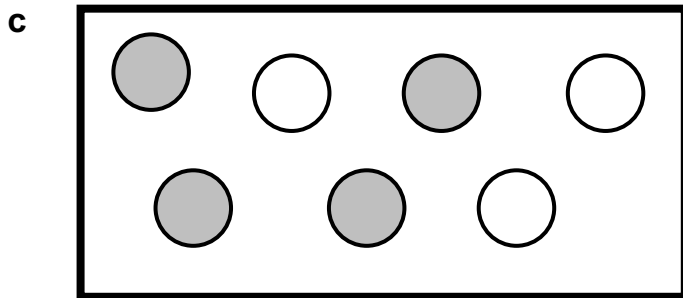
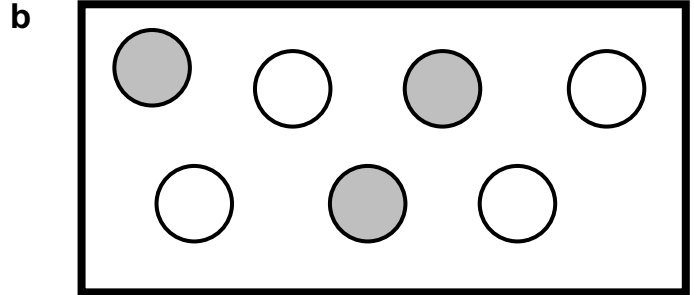
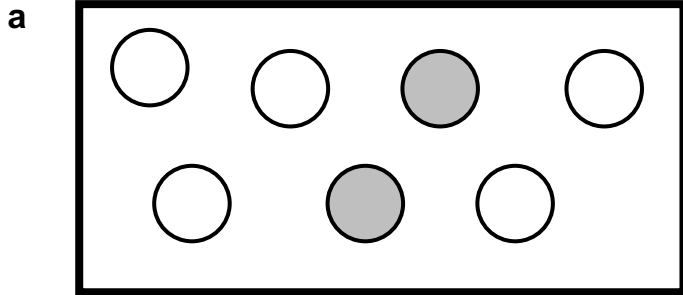




Writing Ratios

For each of the diagrams below:

- i Write down the ratio of shaded shapes to unshaded shapes
- ii Write down the ratio of unshaded shapes to shaded shapes
- iii Write down the fraction of shaded shapes
- iv Write down the fraction of unshaded shapes



ANSWERS

a 2:5
5:2
2/7
5/7

b 3:4
4:3
3/7
4/7

c 4:3
3:4
4/7
3/7

d 3:4
4:3
3/7
4/7

e 4:5
5:4
4/9
5/9

f 4:5
5:4
4/9
5/9

g 3:6 or 1:2
6:3 or 2:1
3/9 or 1/3
6/9 or 2/3

h 2:4 or 1:2
4:2 or 2:1
2/6 or 1/3
4/6 or 2/3